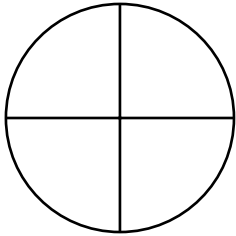
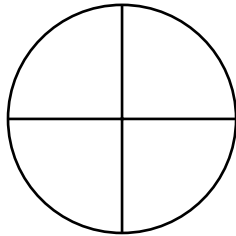


**ZLOMKY - vybarvej podle zadání (aby díly byly u sebe)**

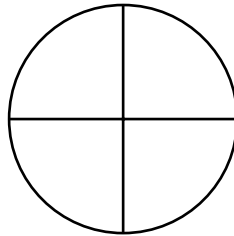
jednu čtvrtinu



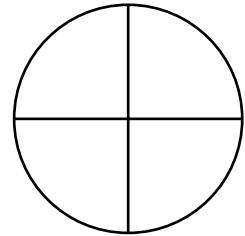
tři čtvrtiny




dvě čtvrtiny




čtyři čtvrtiny



dvě třetiny



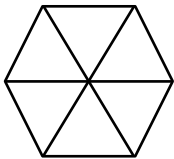
jednu třetinu



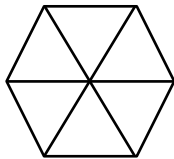
tři třetiny



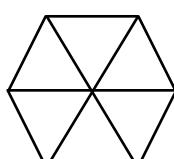
jednu šestinu



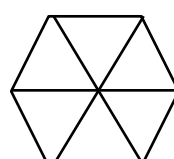
čtyři šestiny



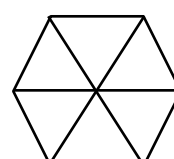
pět šestin



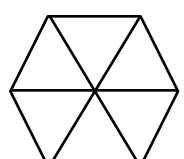
dvě šestiny



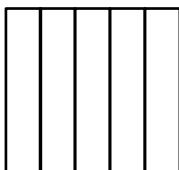
šest šestin



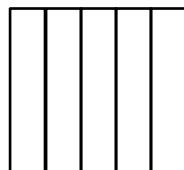
tři šestiny



jednu pětinu



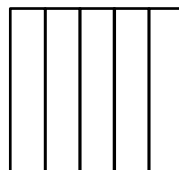
tři pětiny



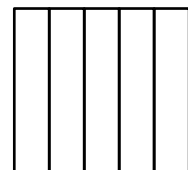
pět pětín



dvě pětiny




čtyři pětiny




$$\frac{1}{5}$$



$$\frac{3}{5}$$



$$\frac{5}{5}$$



$$\frac{2}{5}$$



$$\frac{4}{5}$$

